

Counting

The following chart illustrates a number of different objects and their corresponding quantities. Count them out. If there is none, use 0.

1

2

3

4

5

6

7

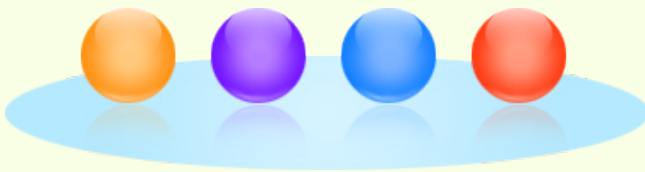
8

9


10

Example 1

How many colored balls do you see?




Explanation




There are 4 colored balls.

Example 2

Count the number of basketballs (🏀) in the picture below.



Explanation



There are 6 basketballs in the picture.

Example 3

Which of the following groups has the same number of items as the group of pineapples shown below?



- A
- B
- C
- D

Explanation



There are 7 pine apples.

- A 
- B 
- C 
- D 

The group C has 7 too. Therefore, group C is the correct answer.

Example 4

How many animals do you see?



Explanation



There are 7 animals.

Example 5

How many ducks (🦆) do you see?



Explanation

There are no ducks (🦆) in the picture, so the answer is 0.